

11. INVERSE TRIG; RELATED RATES

(19/10/2021)

Goals.

- (1) Evaluating inverse trig functions
- (2) Differentiating inverse trig functions
- (3) Related Rates

Last Time. $\frac{d(\log x)}{dx} = \frac{1}{x} \Rightarrow (\log f)' = \frac{f'}{f}$

$\Rightarrow f' = f \cdot (\log f)'$ useful since log converts products to sums, powers to products.

Can differentiate a relation between x, y wrt x to get a relation between x, y, y' .

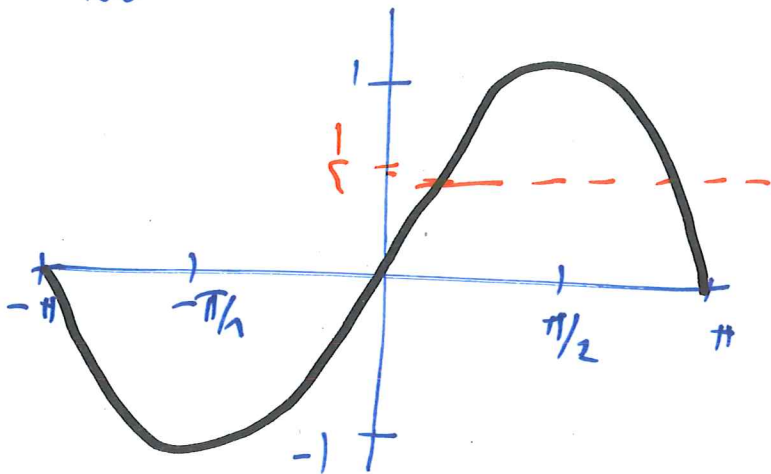
(eg. solve for y' in terms of x, y)

Example: relation $x^y = y^x$. problem: x^y not a power law x^a , not an exponential a^y . Hit with log, get new relation, diff that

Inverse trig

Does $\sin \theta$, $\theta \in \mathbb{R}$ have an inverse?

No



on $[-\pi/2, \pi/2]$ $\sin \theta$ takes every value in $[-1, 1]$ exactly once, so has an inverse there.

Def: $\arcsin x = \theta$ if $\sin \theta = x$ and $-\pi/2 \leq \theta \leq \pi/2$

$\arccos x = \theta$ if $\cos \theta = x$ and $0 \leq \theta \leq \pi$

$\arctan x = \theta$ if $\tan \theta = x$ and $-\pi/2 < \theta < \pi/2$

Warning: $\arcsin(\sin \theta)$ need not be θ
just like $\sqrt{(-5)^2} = 5$

Math 100 - WORKSHEET 11
INVERSE TRIG FUNCTIONS; RELATED RATES

1. INVERSE TRIG FUNCTIONS

(1) Evaluation

(a) (Final 2014) Evaluate $\arcsin\left(-\frac{1}{2}\right)$; Find $\arcsin\left(\sin\left(\frac{31\pi}{11}\right)\right)$

$$\sin\left(\frac{\pi}{6}\right) = \frac{1}{2} \text{ so } \sin\left(-\frac{\pi}{6}\right) = -\frac{1}{2} \text{ so } \arcsin\left(-\frac{1}{2}\right) = -\frac{\pi}{6}$$

want θ s.t. $\sin(\theta) = \sin\left(\frac{31\pi}{11}\right)$ & $\theta \in \left[-\frac{\pi}{2}, \frac{\pi}{2}\right]$

$\frac{31}{11} \approx 3$ so $\frac{31\pi}{11} \notin \left[-\frac{\pi}{2}, \frac{\pi}{2}\right]$: instead

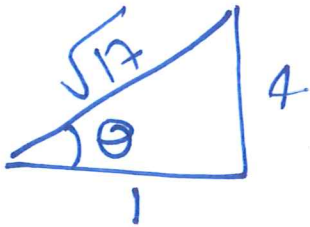
$$\sin\left(\frac{31\pi}{11}\right) = \sin\left(\frac{31\pi}{11} - 2\pi\right) = \sin\left(\frac{9}{11}\pi\right) = \sin\left(\pi - \frac{9}{11}\pi\right) = \sin\left(\frac{2}{11}\pi\right)$$

$$\text{so } \arcsin\left(\sin\left(\frac{31\pi}{11}\right)\right) = \frac{2}{11}\pi$$

$$\begin{array}{c} \uparrow \\ \sin(\pi - \theta) = \sin \theta \end{array}$$

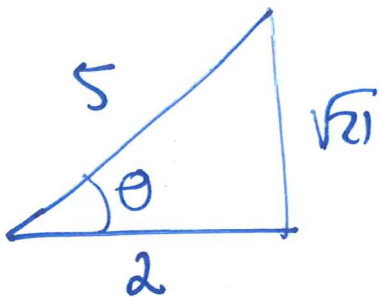
(b) (Final 2015) Simplify $\sin(\arctan 4)$

let $\theta = \arctan 4$



$$\text{so } \sin \theta = \frac{4}{\sqrt{17}}$$

(c) Find $\tan(\arccos(0.4))$



$$\text{so } \tan(\arccos(0.4)) = \frac{\sqrt{21}}{2}$$

(choose two sides so θ has the right value, find 3rd using Pythagoras, read off trig function)

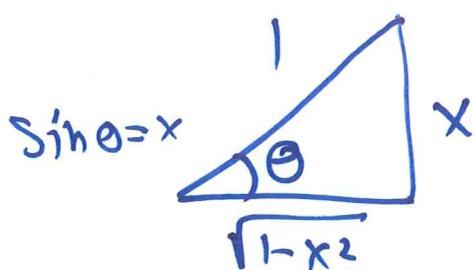
Differentiating arcsin etc

Let $\theta = \arcsin x$, Then $x = \sin \theta$

$$\text{So } 1 = \frac{dx}{dx} = \frac{d(\sin \theta)}{dx} = \cos \theta \cdot \frac{d\theta}{dx}$$

↑
implicit diff a.k.a. chain rule

$$\text{So } \frac{d\theta}{dx} = \frac{1}{\cos \theta} = \frac{1}{\sqrt{1 - \sin^2 \theta}} = \frac{1}{\sqrt{1 - x^2}}$$



$$\cos \theta = \sqrt{1 - x^2}$$

← simplify $\cos(\arcsin x)$
($\cos(\arcsin x) \geq 0$ for all x)

Similarly: $\cos \theta = \sin(\frac{\pi}{2} - \theta)$

$$\Rightarrow \arccos x = \frac{\pi}{2} - \arcsin x$$

$$\Rightarrow (\arccos x)' = -(\arcsin x)'$$

$$(\arcsin x)' = \frac{1}{\sqrt{1-x^2}}$$

$$(\arctan x)' = \frac{1}{1+x^2}$$

(2) Differentiation

(a) Find $\frac{d}{dx} (\arcsin(2x)) = \frac{1}{\sqrt{1-(2x)^2}} \cdot 2$

$\frac{d(2x)}{dx}$
↓

(b) Find the line tangent to $y = \sqrt{1 + (\arctan(x))^2}$ at the point where $x = 1$.

$$\frac{dy}{dx} = \frac{1}{2\sqrt{1+(\arctan x)^2}} \cdot 2(\arctan(x)) \cdot \frac{1}{1+x^2}$$

at $x=1$ $\arctan x = \arctan 1 = \frac{\pi}{4}$.

$$(\text{= } 45^\circ = \frac{\pi}{4})$$

(c) Find y' if $y = \arcsin(e^{5x})$. What is the domain of the functions y, y' ?

if position is $x(t)$, velocity is $v(t) = \frac{dx}{dt}$, acceleration is $a(t) = \frac{dv}{dt}$.

2. VELOCITY AND ACCELERATION

(3) A particle's position is given by $f(t) = t + 6e^{-t/3}$.

(a) Find the velocity at time t , and specifically at $t =$

3.

$$v(t) = \frac{df}{dt}(t) = 1 - 2e^{-t/3}$$

$$v(3) = 1 - \frac{2}{e}$$

(b) When is the particle moving to the right? to the left?

moving right $\Leftrightarrow v(t) > 0$ so in. $1 > 2e^{-t/3} \Leftrightarrow e^{t/3} > 2$
 $\Leftrightarrow t > 3 \log_2 2$

(moving left if $t < 3 \log_2 2$)

(c) When is the particle accelerating? decelerating?

$$a(t) = \frac{dv}{dt}(t) = \frac{2}{3} e^{-t/3}$$

determine when
 a, v have same
or opposite signs

Related Rates

Say we have a relation between two quantities:

$$x^2 + y^2 = 1$$

$$P = T \cdot (\rho \cdot k)$$

↑ pressure ↑ temp ↑ density ← gas constant

imagine both quantities change with time
can still take $\frac{d}{dt}$, get relation involving

$$x, y, \frac{dx}{dt}, \frac{dy}{dt}.$$

Ex: if $x^2 + y^2 = 1$ then $2x \cdot \frac{dx}{dt} + 2y \cdot \frac{dy}{dt} = 0$.

Given any two of $x, y, \frac{dx}{dt}, \frac{dy}{dt}$, can solve for other two

3. RELATED RATES

- (6) A particle is moving along the curve $y^2 = x^3 + 2x$.
When it passes the point $(1, \sqrt{3})$ we have $\frac{dy}{dt} = 1$.
Find $\frac{dx}{dt}$.

$$\text{diff wrt } t: \quad 2y \frac{dy}{dt} = 3x^2 \frac{dx}{dt} + 2 \frac{dx}{dt}$$

$$\text{set } x=1, y=\sqrt{3}, \frac{dy}{dt}=1, \text{ get} \quad 2\sqrt{3} \cdot 1 = 3 \frac{dx}{dt} + 2 \frac{dx}{dt}$$

$$\text{so } \frac{dx}{dt} = \frac{2\sqrt{3}}{5}.$$

Alternative solution: diff wrt y :

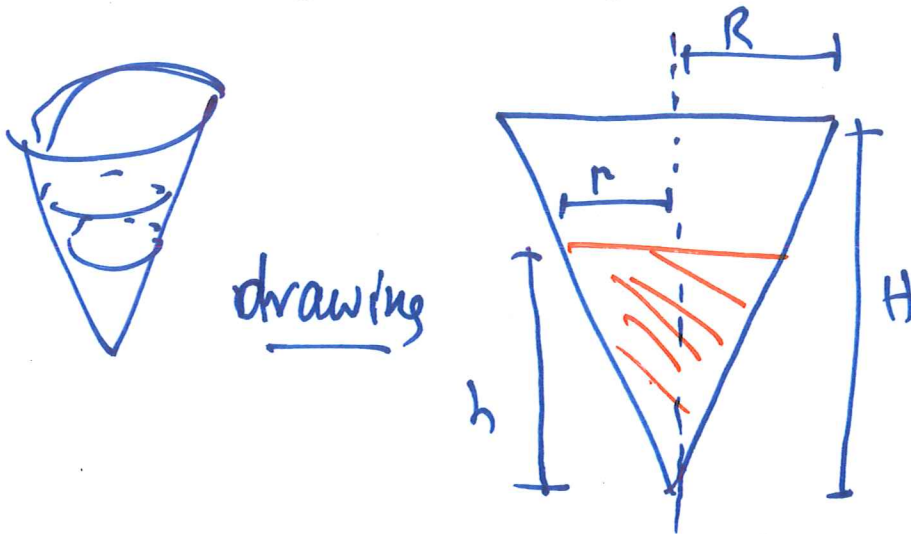
$$2y = 3x^2 \frac{dx}{dy} + 2 \frac{dx}{dy} \quad \text{so}$$

$$\frac{dx}{dy} = \frac{2y}{3x^2 + 2} \quad \left(= \frac{2\sqrt{3}}{5} \text{ at } \begin{matrix} y=\sqrt{3} \\ x=1 \end{matrix} \right)$$

$$\text{then } \frac{dx}{dt} = \frac{dx}{dy} \cdot \frac{dy}{dt} = \frac{2\sqrt{3}}{5}$$

(7) (Final, 2015, variant) A conical tank of water is 6m tall and has radius 1m at the top.

(a) The drain is clogged, and is filling up with rainwater at the rate of $5\text{m}^3/\text{min}$. How fast is the water rising when its height is 5m?



names

H = height of cone

R = radius "

V = volume of water

h = height of water

r = radius of (top)
of water

(b) The drain is unclogged and water begins to clear at the rate of $\frac{\pi}{4}\text{m}^3/\text{min}$ (but rain is still falling). At what height is the water falling at the rate of $1\text{m}/\text{min}$?